









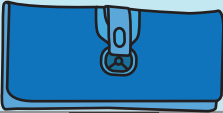
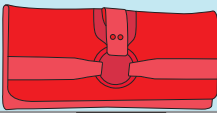







Money Word Problems

			
\$ 9.56	\$ 8.25	\$ 6.73	\$ 7.89
			
\$ 2.97	\$ 4.54	\$ 3.65	\$ 5.02
			
\$ 5.66	\$ 2.89	\$ 4.73	\$ 3.49
			
\$ 6.10	\$ 8.51	\$ 7.00	\$ 9.05

Emma
Fashion Accessories



- 1) Deborah had \$20. She bought a green handbag. How much money does she have left? _____











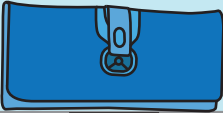
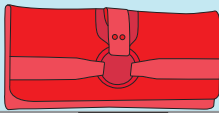




- 2) Mary buys a pair of green shoes and a green wallet. She has a coupon worth \$12.75. How much money does she need to pay? _____

- 3) Kayla bought a pair of red shoes and a brown hat. How much money did she pay? _____


- 4) Anne has enough money to buy a cheapest handbag. How much more money does she need to buy a costliest handbag? _____

- 5) If Shirley bought all the matching accessories for her yellow dress, how much money does she pay? _____

Money Word Problems

			
\$ 9.56	\$ 8.25	\$ 6.73	\$ 7.89
			
\$ 2.97	\$ 4.54	\$ 3.65	\$ 5.02
			
\$ 5.66	\$ 2.89	\$ 4.73	\$ 3.49
			
\$ 6.10	\$ 8.51	\$ 7.00	\$ 9.05

Emma
Fashion Accessories



1) Deborah had \$20. She bought a green handbag. How much money does she have left?

\$ 11.75

2) Mary buys a pair of green shoes and a green wallet. She has a coupon worth \$12.75. How much money does she need to pay?

\$ 1.96

3) Kayla bought a pair of red shoes and a brown hat. How much money did she pay?

\$ 10.65

4) Anne has enough money to buy a cheapest handbag. How much more money does she need to buy a costliest handbag?

\$ 2.83

5) If Shirley bought all the matching accessories for her yellow dress, how much money does she pay?

\$ 18.69
