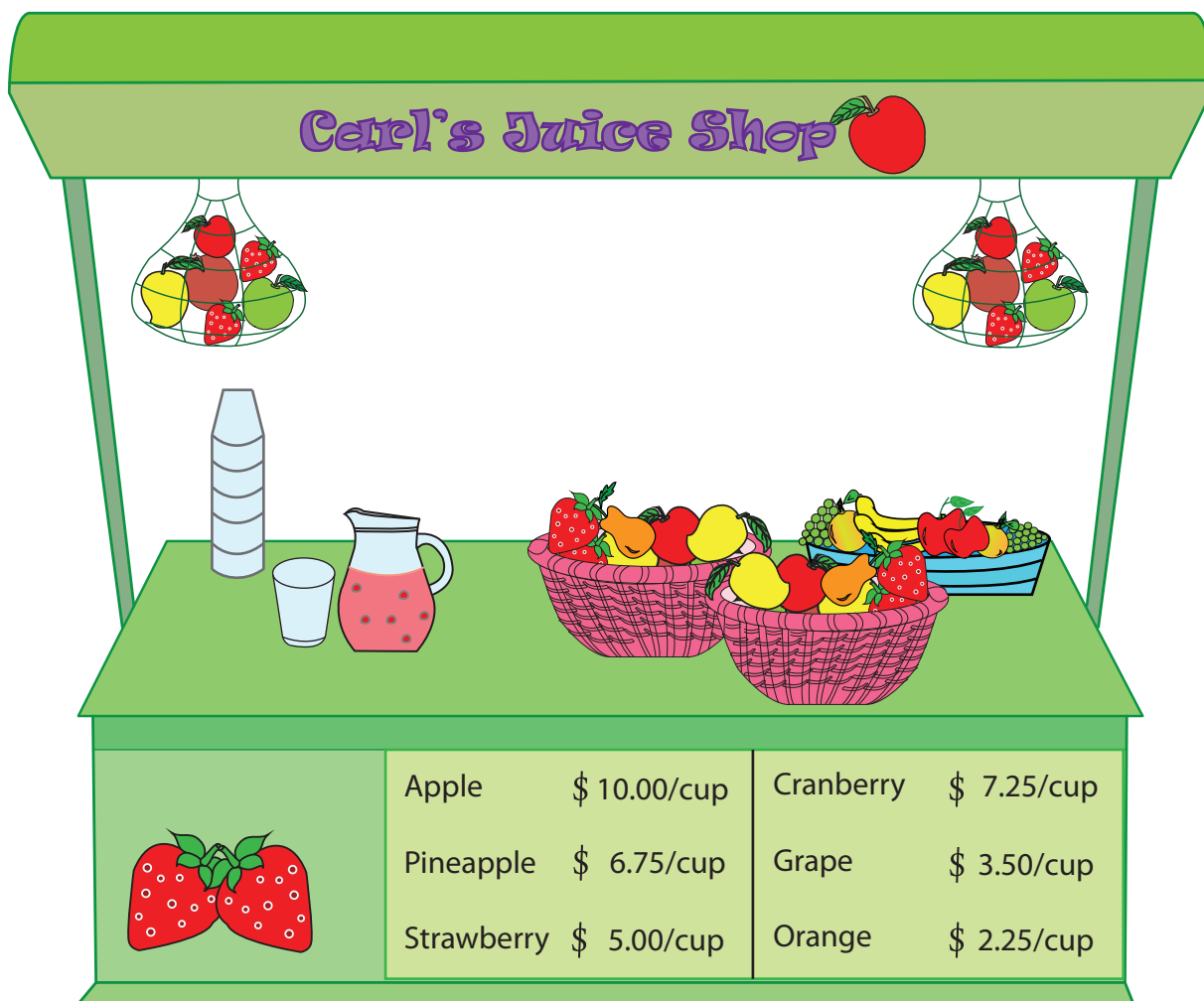



Name : \_\_\_\_\_

Score : \_\_\_\_\_



Carl's Juice Shop

	Apple	\$ 10.00/cup	Cranberry	\$ 7.25/cup
	Pineapple	\$ 6.75/cup	Grape	\$ 3.50/cup
	Strawberry	\$ 5.00/cup	Orange	\$ 2.25/cup

1) Harry bought 4 cups of pineapple juice, Bruce bought 3 cups of cranberry juice. Who spent more money? \_\_\_\_\_

2) Edna bought a cup of strawberry juice for each of her friend. She spent 30 dollars in all. If Edna did not consume any juice, how many friends are there with her? \_\_\_\_\_


3) How much money does Sharon need to buy 5 cups of grape juice? \_\_\_\_\_


4) The shopkeeper made \$ 90.00 on selling apple juice. How many cups of apple juice did he sell? \_\_\_\_\_


5) If Sam bought 2 cups of juice of same kind for \$ 4.50, which juice he could buy? \_\_\_\_\_

Name : \_\_\_\_\_

Score : \_\_\_\_\_

**Carl's Juice Shop** 



	Apple	\$ 10.00/cup	Cranberry	\$ 7.25/cup
	Pineapple	\$ 6.75/cup	Grape	\$ 3.50/cup
	Strawberry	\$ 5.00/cup	Orange	\$ 2.25/cup

1) Harry bought 4 cups of pineapple juice, Bruce bought 3 cups of cranberry juice. Who spent more money?

**Harry**

---

2) Edna bought a cup of strawberry juice for each of her friend. She spent 30 dollars in all. If Edna did not consume any juice, how many friends are there with her?

**6**

---

3) How much money does Sharon need to buy 5 cups of grape juice?

**\$ 17.50**

---

4) The shopkeeper made \$ 90.00 on selling apple juice. How many cups of apple juice did he sell?

**9**

---

5) If Sam bought 2 cups of juice of same kind for \$ 4.50, which juice he could buy?

**orange**

---